

Visuprep OLSAT Level C Grade 2 Sample Questions

<https://visuprep.com>


For answers, see the end of the document.

For explanations, go to <https://visuprep.com/olsat-level-c-grade-2-tests>

1.

Choose the answer that shows a porcupine.

 VISUPREP



(A)



(B)



(C)



(D)


2.

A chef gave instructions on how to set a table as shown in the leftmost picture below. Mike tried to follow the chef's instructions but made some mistakes when setting the table. To fix his mistakes, Mike needed to switch two objects and move another object. Which one of the four pictures on the right shows how Mike set the table before he fixed it?

 VISUPREP



(A)



(B)




(C)



(D)

3.

Count how many apples are in the first picture. If 2 children take 3 apples each, how many apples would be left?



(A)



(B)




(C)




(D)

4.


Four of these pictures have something in common. Choose the picture that is **not** like the others.



(A)



(B)



(C)




(D)



(E)

5.

The pictures on the top row are related. Which answer should go in the box containing a question mark so that the pictures on the bottom row are related in the same way as the pictures on the top row?



(A)



(B)



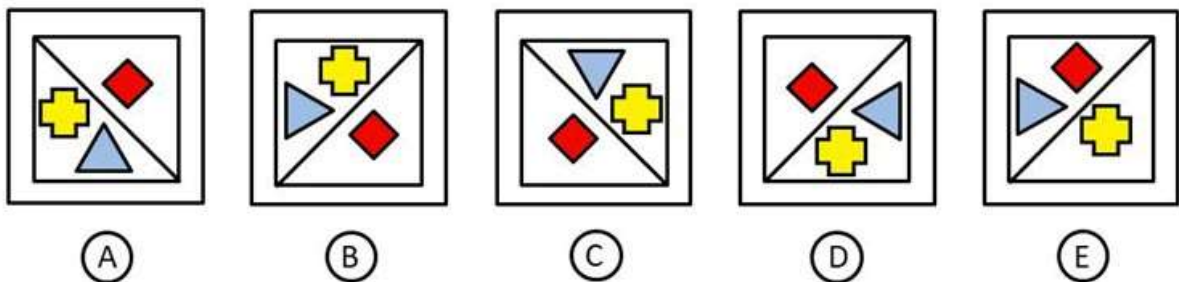
(C)



(D)

6.

Choose the figure which is **not** like the others.



(A)

(B)


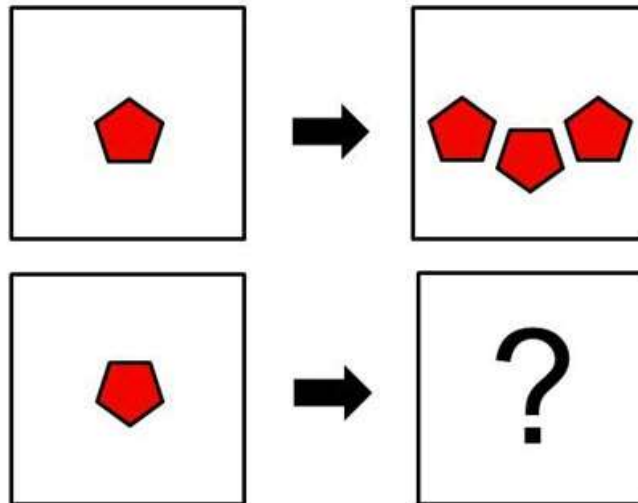
(C)

(D)

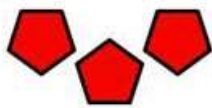
(E)

7.


The figures on the top row are related. Which answer should go in the box containing a question mark so that the figures on the bottom row are related in the same way as the figures on the top row?



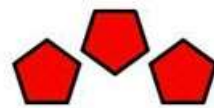
(A)



(B)



(C)

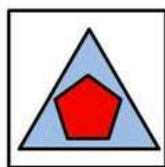



(D)


8.

In the matrix below, there are several shapes that go together in a certain way. Choose the figure that goes in the box containing the question mark.

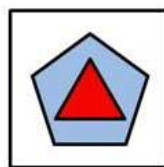
 VISUPREP



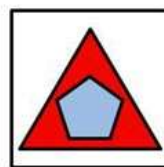
(A)




(B)



(C)



(D)

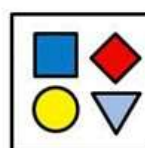
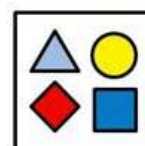






(E)

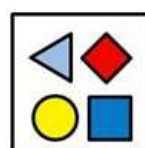
9.

Choose the figure that continues the series and goes in the box containing a question mark.


 VISUPREP



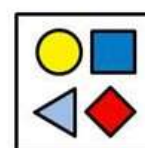
(A)



(B)



(C)



(D)

Answers

1. C
2. B
3. C
4. D
5. A
6. E
7. B
8. C
9. D