

Visuprep NYC G&T Level C Grade 2 Sample Questions

<https://visuprep.com>


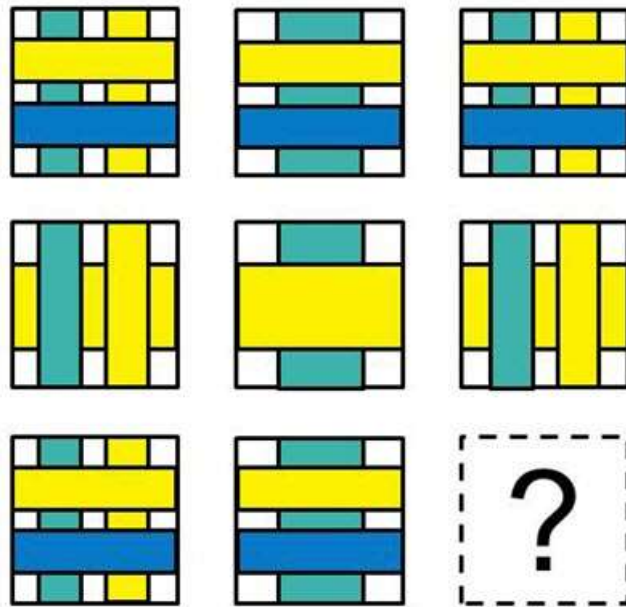
For answers, see the end of the document.

For explanations, go to <https://visuprep.com/nyc-gifted-talented-grade-2-test-prep>


NNAT Nonverbal Questions

1.


The small white square containing a question mark represents a portion of the pattern which has been removed. Which option completes the pattern?




①



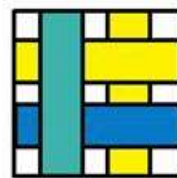
②



③



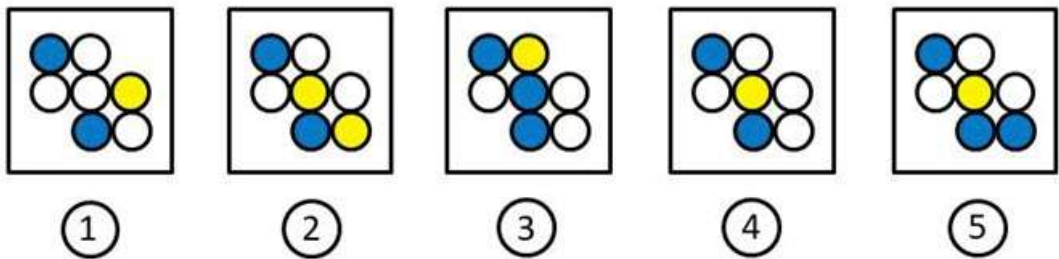

④



⑤

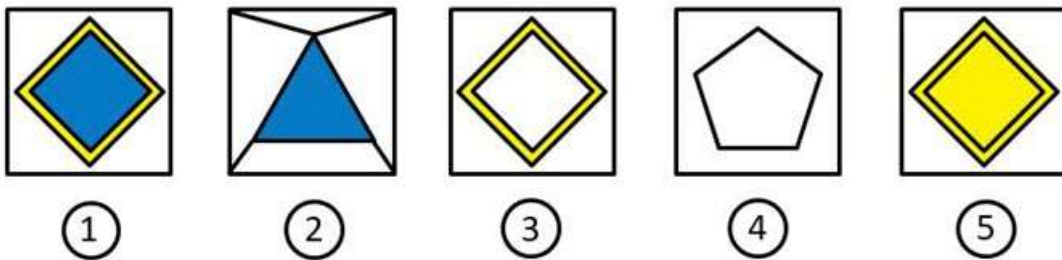

2.

Which option completes the puzzle?



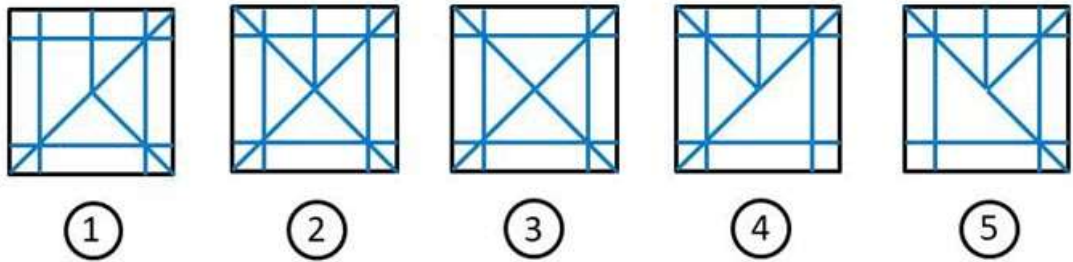

3.

Which option completes the puzzle?



4.


Which option completes the puzzle?



OLSAT Verbal Questions

1.

Choose the answer that shows a porcupine.



(A)



(B)



(C)



(D)

2.

A chef gave instructions on how to set a table as shown in the leftmost picture below. Mike tried to follow the chef's instructions but made some mistakes when setting the table. To fix his mistakes, Mike needed to switch two objects and move another object. Which one of the four pictures on the right shows how Mike set the table before he fixed it?



(A)



(B)



(C)



(D)

3.

Count how many apples are in the first picture. If 2 children take 3 apples each, how many apples would be left?



(A)



(B)



(C)



(D)

Answers

NNAT Questions

1. 3
2. 4
3. 5
4. 2

OLSAT Questions

1. C
2. B
3. C