

## Visuprep InView Level 1 (Grades 2 and 3) Sample Questions

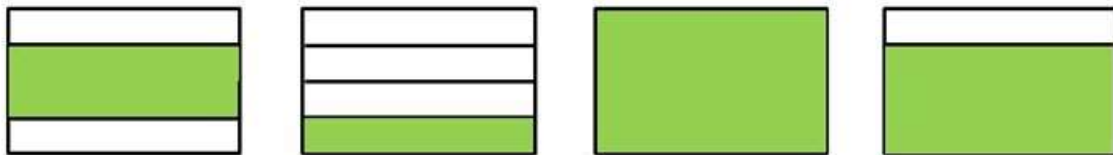
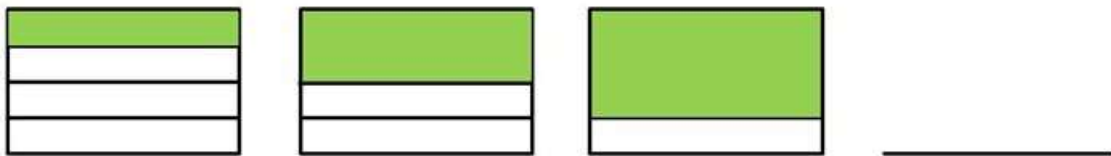
<https://visuprep.com>

For answers, see the end of the document.

For explanations, go to <https://visuprep.com/inview-test-prep>

1.

Choose the answer that continues the sequence or completes the pattern in the top row.



(A)

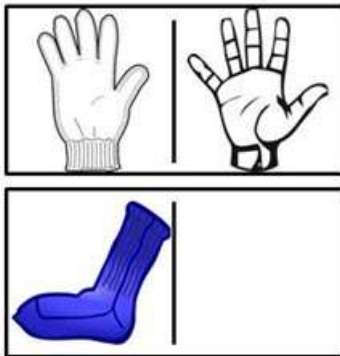
(B)

(C)

(D)

2.

The pictures on the top row are related. Which answer should go in the empty box so that the pictures on the bottom row are related in the same way as the pictures on the top row?



(A)



(B)




(C)




(D)

3.


Each grid is made up of small squares and has some shaded black areas. Which grid has the largest black area?



(A)



(B)



(C)



(D)

4.

Choose the answer that can be made by adding or subtracting any two of the numbers in the rectangle.



4

(A)

7

(B)

9

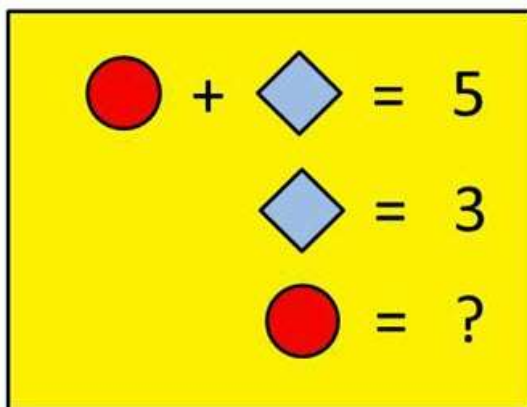
(C)

12

(D)

5.

Find the value of the question mark based on the following number sentences.



1

(A)

2

(B)

3

(C)

4

(D)

6.

Which of these is a necessary part of the underlined word?



automobile

- (A) travel
- (B) engine
- (C) comfort
- (D) leather

7.

Which answer is most like the three underlined words?



small

little

minute

- (A) tiny
- (B) second
- (C) cute
- (D) neat

8.

Three of these words belong together. Choose the answer that does not belong.



horse

donkey

saddle

dog

(A)

(B)

(C)

(D)

9.

The words in the top row go together in a certain way. The words in the second row go together in the same way. Choose the answer that completes the second row of words.



ram

ewe

lamb

stallion

mare

\_\_\_\_\_

(A) fowl

(B) cub

(C) kid

(D) foal

10.

Choose the answer that must be true based on the facts in the two sentences below.



**Jack is the fastest sprinter in his class.**

**Jim is in the same class as Jack.**

- (A) Jack is the fastest sprinter in his school.
- (B) Jim is a good sprinter.
- (C) Jack likes athletics.
- (D) Jim is a slower sprinter than Jack.

### Answers

- 1. C
- 2. D
- 3. C
- 4. C
- 5. B
- 6. B
- 7. A
- 8. C
- 9. D
- 10. D