

## Visuprep CogAT Form 7 Level 8 (Grade 2) Sample Questions

<https://visuprep.com>

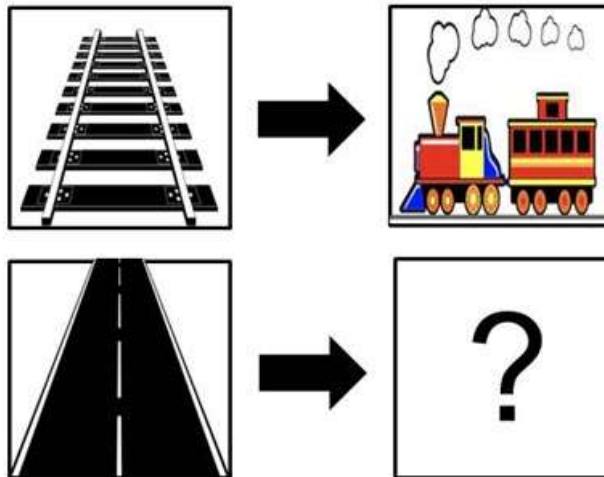
For answers, see the end of the document.

For explanations, go to <https://visuprep.com/cogat>

### Verbal Battery

#### 1. Picture Analogies

The pictures on the top row are related. Which answer should go in the box with the question mark so that the pictures on the bottom row are related in the same way as the pictures on the top row?



A



B



C



D

## 2. Sentence Completion

Which one is best for storing jewelry?



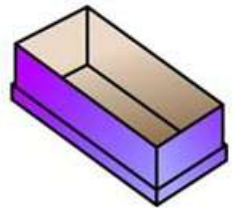
A



B



C



D

## 3. Picture Classification

Which picture is most similar to the top three pictures?



A



B



C

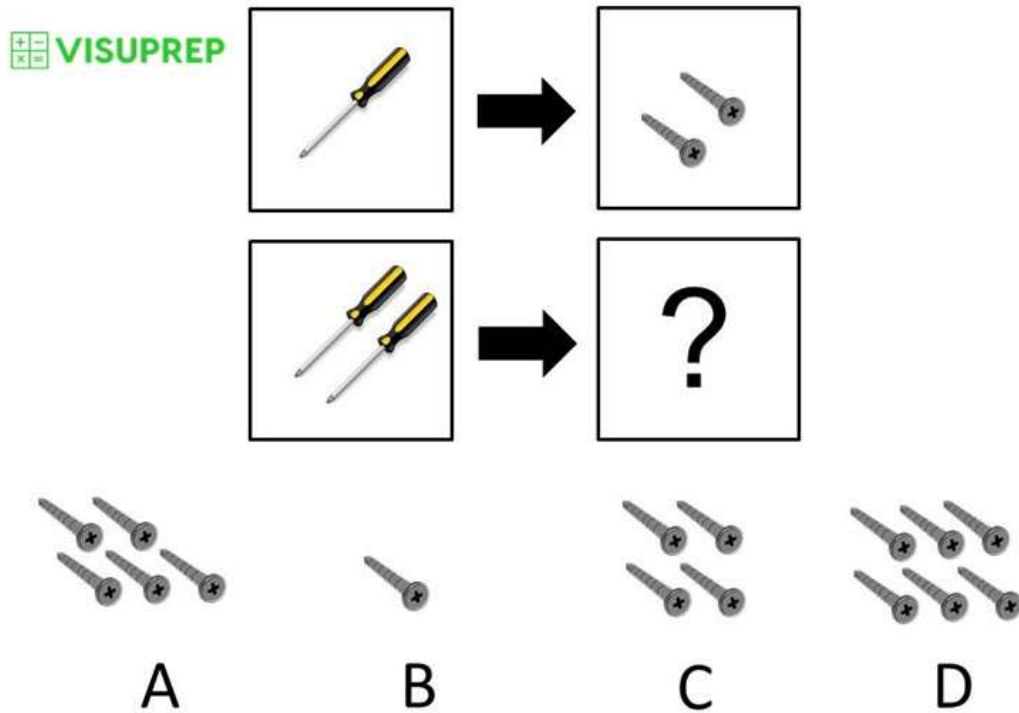


D

Quantitative Battery

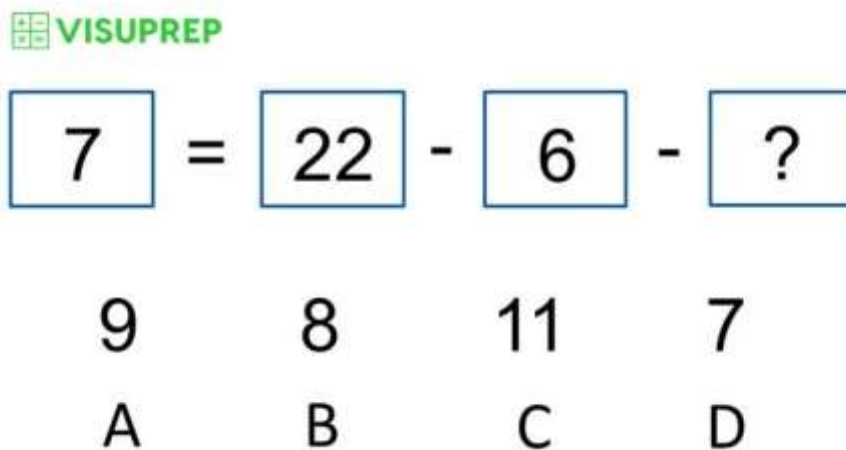
4. Number Analogies

The pictures on the top row are related. Which answer should go in the box with the question mark so that the pictures on the bottom row are related in the same way as the pictures on the top row?



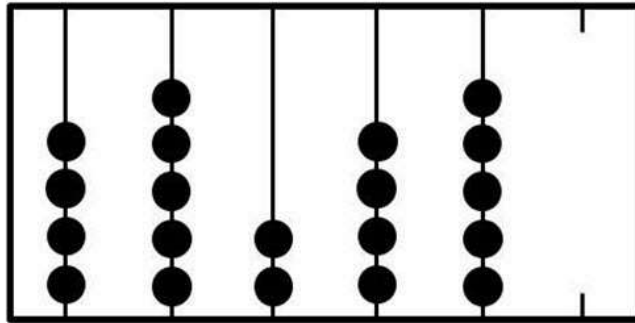
5. Number Puzzles

Which answer contains the number which should replace the question mark to make the equation correct?



### 6. Number Series

The picture below shows an abacus that is missing the last rod. Look for a rule or pattern used in the first five rods to determine the number of beads that should go on the missing rod. Which answer contains the correct number of beads for the missing rod?



A



B



C

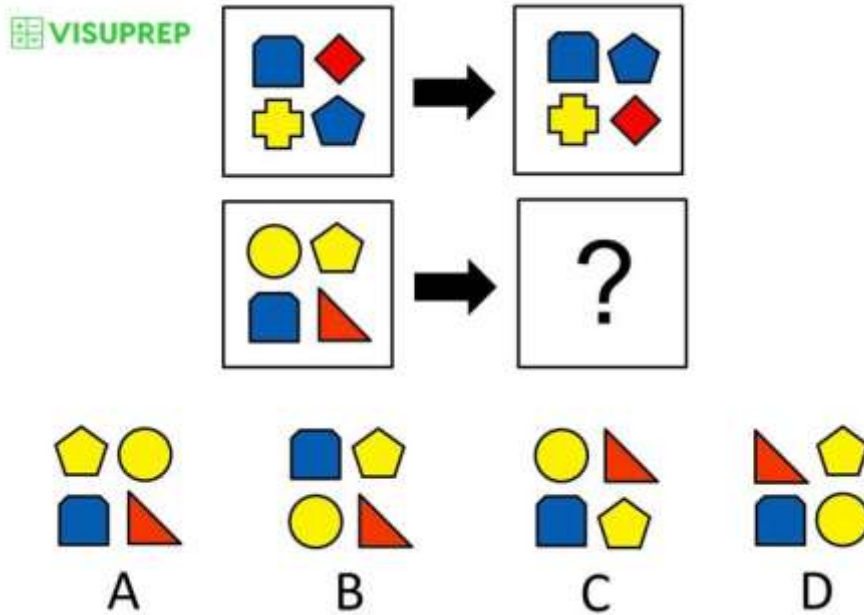


D

## Nonverbal Battery

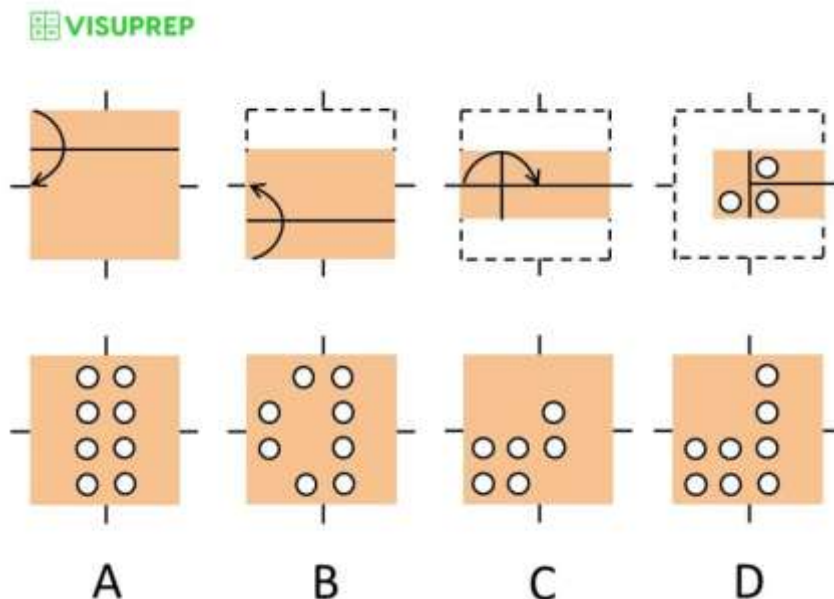
### 7. Figure Matrices

The figures on the top row are related. Which answer should go in the box with the question mark so that the figures on the bottom row are related in the same way as the figures on the top row?



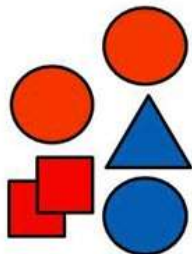
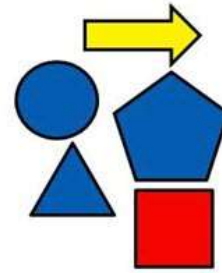


### 8. Paper Folding

The pictures on the top row show a square piece of paper being folded and then the folded paper is hole-punched. Choose the answer from the bottom row that shows how the folded paper with holes will look when it is unfolded.




### 9. Figure Classification

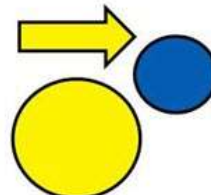
Which figure is most similar to the top three figures?




A



B



C



D

### Answers

1. B
2. B
3. D
4. C
5. A
6. A
7. C
8. D
9. D